

Name : _____

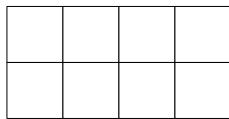
Date : _____



Find the area of the rectangles below.  = 1 square unit

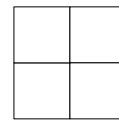
Example:  Area = 3 square units

1)



Area = 8 square units

2)



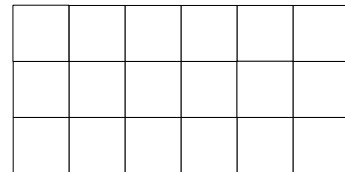
Area = 4 square units

3)



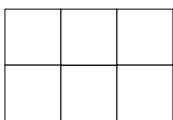
Area = 10 square units

4)



Area = 18 square units

5)



Area = 6 square units

6)



Area = 7 square units