

Name : _____

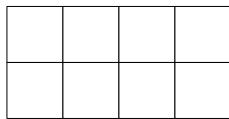
Date : _____



Find the area of the rectangles below.  = 1 square unit

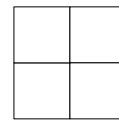
Example:  Area = 3 square units

1)



Area = _____

2)



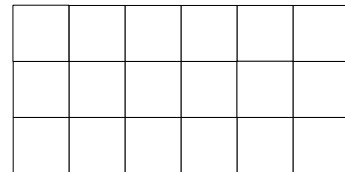
Area = _____

3)



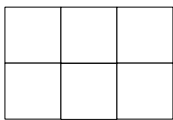
Area = _____

4)




Area = _____

5)



Area = _____

6)



Area = _____