


Name : _____


Date : _____



Find the area of the rectangles below.

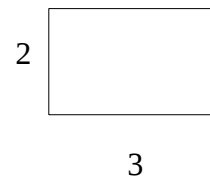
Example:  1 Area = $3 \times 1 = 3$
3

1)



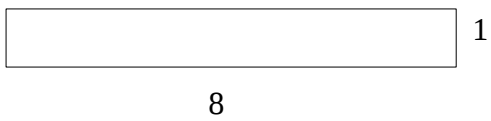
Area = 12

2)



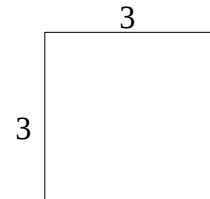
Area = 6

3)



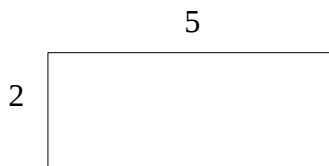
Area = 8

4)



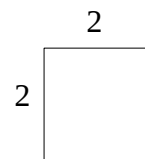
Area = 9

5)



Area = 10

6)



Area = 4