


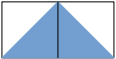
Name : _____

Date : _____

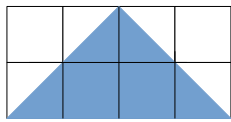


Find the area of the triangles below. Do not use a formula!

 = 1 square unit

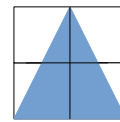
Example:  Area = half a square unit + half a square unit = 1 square unit

1)



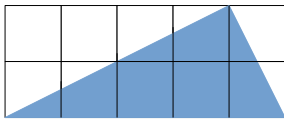
Area = 4 square units

2)



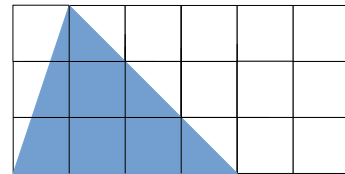
Area = 2 square units

3)



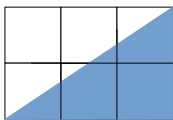
Area = 5 square units

4)



Area = 6 square units

5)



Area = 3 square units

6)



Area = 4 square units