



Name : _____

Date : _____



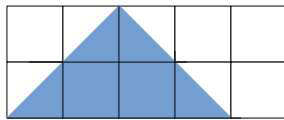
Use this formula to find the area of the triangles below: $\text{area} = (\text{base} \times \text{height})/2$  = 1 square unit

Then, find the area again for each triangle by counting the square units.

Example:  $\text{area} = (\text{base} \times \text{height})/2 = (2 \times 1)/2 = 2/2 = 1$

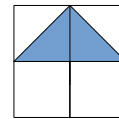
Area = half a square unit + half a square unit = 1 square unit

1)



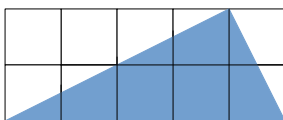
Area = _____

2)



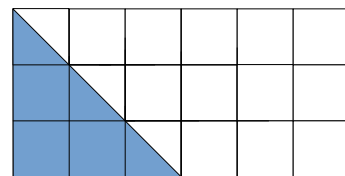
Area = _____

3)



Area = _____

4)



Area = _____