

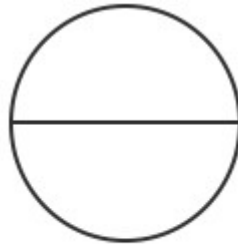
Name: _____

Date: _____

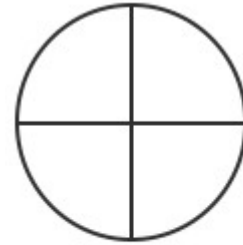
Color each circle to show the fraction.



$$\frac{2}{4}$$



$$\frac{1}{2}$$



$$\frac{3}{4}$$



$$\frac{2}{3}$$



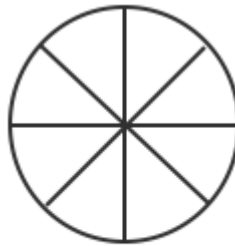
$$\frac{1}{3}$$



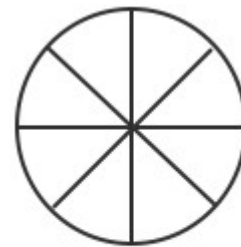
$$\frac{3}{3}$$



$$\frac{3}{8}$$



$$\frac{7}{8}$$



$$\frac{6}{8}$$