

## Counting worksheet


Name: \_\_\_\_\_

Date: \_\_\_\_\_

Teacher : \_\_\_\_\_


Count the apples and circle the correct answer in red

1.




4      5      6

2.



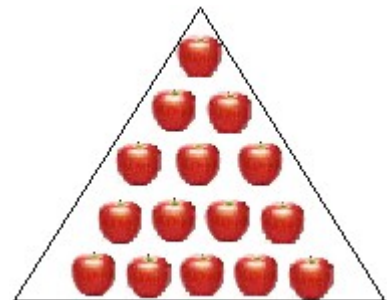
8      10      9

2.



10      11      9

3.




20      15      17

5.



2      1      0

6.



8      7      9